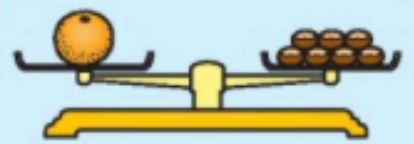
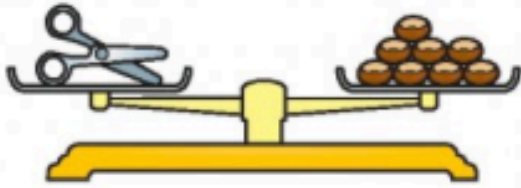


Weight



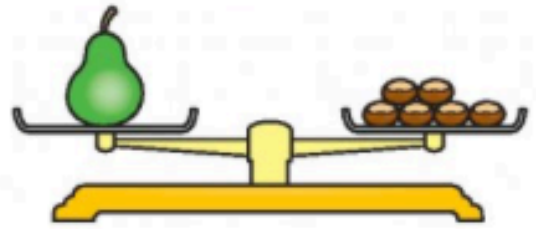
Count the number of conkers on each balance. **Write** the correct numeral.

a



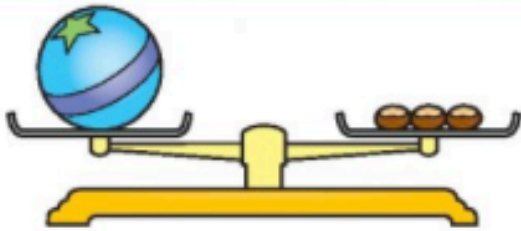
The scissors weigh ____ conkers.

b



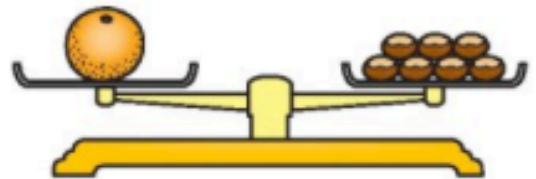
The pear weighs ____ conkers.

c



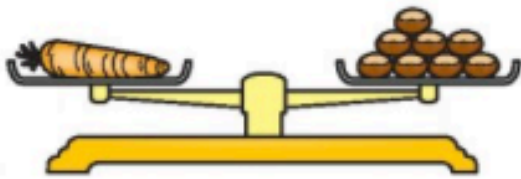
The ball weighs ____ conkers.

d



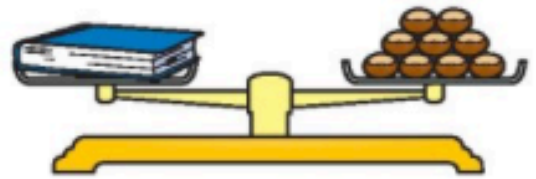
The orange weighs ____ conkers.

e



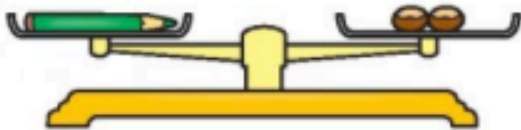
The carrot weighs ____ conkers.

f



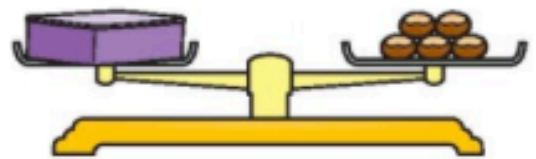
The book weighs ____ conkers.

g



The pencil weighs ____ conkers.

h



The lunchbox weighs ____ conkers.

Write.

The _____ is the heaviest of all.

The _____ is the lightest of all.

The _____ and _____ weigh the same.

