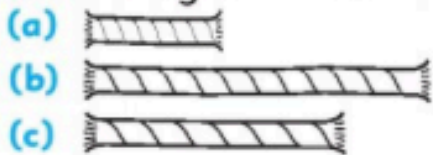


# Wednesday

1. Colour the longest scarf green.



2. Match. **day** •

**night** •



3. Count and write the correct number.



4. How many?



5. Finish the pattern.



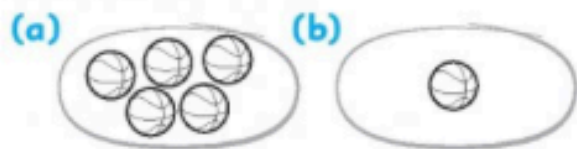
6. Draw 5 spots on the ladybird.



7. Colour the 1c coins.



8. Colour the set that has more.



Count. Add. Write.

9. + =

10. + =

/10

# Thursday

1. Colour the wider door.

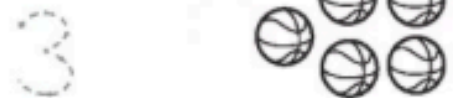


2. Match. **day** •

**night** •



3. Write. Colour the correct number of balls.



4. Colour the coins needed to buy the kiwi.



5. Colour the rectangles.



6. How many?



7. , 2, 3, , 5

8. Count. Add. Write.



9. How many red triangles are there?

10. How many yellow triangles are there?

/10